

Please check the examination details below before entering your candidate information

Candidate surname

Other names

**Pearson Edexcel
International GCSE**

Centre Number

--	--	--	--	--

Candidate Number

--	--	--	--	--

Tuesday 21 May 2019

Morning (Time: 2 hours)

Paper Reference **4MA1/1F**

Mathematics A

Level 1/2

Paper 1F

Foundation Tier



You must have:

Ruler graduated in centimetres and millimetres, protractor, compasses, pen, HB pencil, eraser, calculator. Tracing paper may be used.

Total Marks

Instructions

- Use **black** ink or ball-point pen.
- **Fill in the boxes** at the top of this page with your name, centre number and candidate number.
- Answer **all** questions.
- Without sufficient working, correct answers may be awarded no marks.
- Answer the questions in the spaces provided
– *there may be more space than you need.*
- **Calculators may be used.**
- You must **NOT** write anything on the formulae page.
Anything you write on the formulae page will gain **NO** credit.

Information

- The total mark for this paper is 100.
- The marks for **each** question are shown in brackets
– *use this as a guide as to how much time to spend on each question.*

Advice

- Read each question carefully before you start to answer it.
- Check your answers if you have time at the end.

Turn over ►

P58366A

©2019 Pearson Education Ltd.

1/1/1

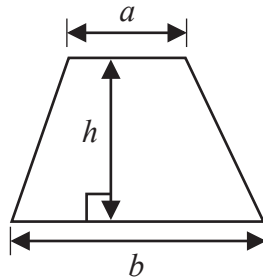



Pearson

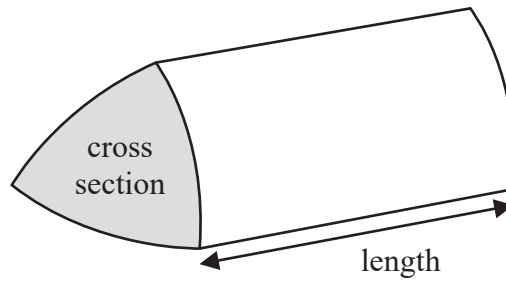
International GCSE Mathematics

Formulae sheet – Foundation Tier

Area of trapezium = $\frac{1}{2}(a + b)h$

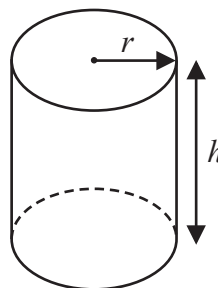


Volume of prism = area of cross section \times length



Volume of cylinder = $\pi r^2 h$

Curved surface area of cylinder = $2\pi r h$



DO NOT WRITE IN THIS AREA

DO NOT WRITE IN THIS AREA

DO NOT WRITE IN THIS AREA



DO NOT WRITE IN THIS AREA

DO NOT WRITE IN THIS AREA

DO NOT WRITE IN THIS AREA

Answer ALL TWENTY THREE questions.

Write your answers in the spaces provided.

You must write down all the stages in your working.

1

3	8	16	19	24	51	60	81
---	---	----	----	----	----	----	----

From the numbers in the box, write down

(a) an odd number

ends in 1, 3, 5, 7 or 9

3
.....
(1)

(b) a multiple of 12

in 12 times tables

24
.....
(1)

(c) a square number

a number multiplied by itself
= square

81
.....
(1)

(d) a prime number

only divisible by 1 and itself

19
.....
(1)

(Total for Question 1 is 4 marks)

2 Complete the following statements by writing a number on each dotted line.

(a) A pentagon has 5 sides.

(1)

$180 \div 3 =$

(b) The size of each angle in an equilateral triangle is 60 °

(1)

(c) 1 kilometre = 1000 metres.

x1000

(1)

(Total for Question 2 is 3 marks)



P 5 8 3 6 6 A 0 3 2 4

- 3 The table gives the surface areas, in square kilometres, of six lakes in Africa.

Lake	Surface area (square kilometres)
Albert	5299
Malawi	29 500
Mweru	5120
Tanganyika	32 600
Turkana	6405
Victoria	68 879

— lowest

- (a) Which of these lakes has the least surface area?

lowest number

Mweru

(1)

- (b) Write the number 6405 in words.

Six thousand, four hundred and five

(1)

- (c) Write the number 68879 correct to the nearest thousand.

round up 8 > 5

69000

(1)

Sammy says that the surface area of Lake Malawi is about $5\frac{1}{2}$ times the surface area of Lake Albert.

- (d) Is Sammy correct?

Give a reason for your answer.

$$\text{Ratio : } \frac{\text{Malawi}}{\text{Albert}} = \frac{29500}{5299} = 5.56$$

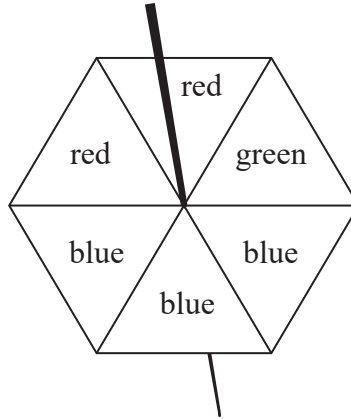
5.56 is close to 5.5, so Sammy's estimate is correct

(2)

(Total for Question 3 is 5 marks)



4 The diagram shows a fair 6-sided spinner.



Rami is going to spin the spinner once.

(a) Circle the word in the box below that best describes the likelihood that the spinner will land on green.

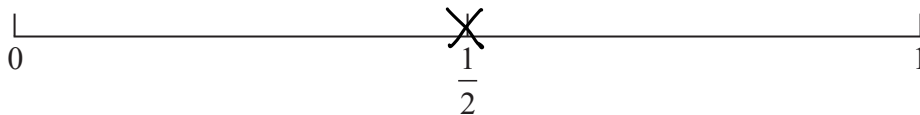
only 1 green

impossible	<u>unlikely</u>	evens	likely	certain
------------	-----------------	-------	--------	---------

(1)

(b) On the probability scale below, mark with a cross (X) the probability that the spinner will land on blue.

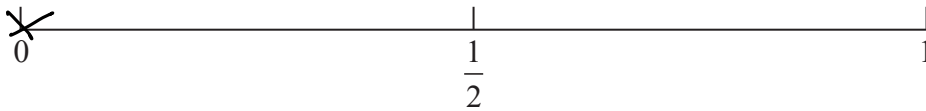
3 out of 6 are blue = 1/2



(1)

(c) On the probability scale below, mark with a cross (X) the probability that the spinner will land on yellow.

No yellow so it is impossible



(1)

(Total for Question 4 is 3 marks)



- 5 There are 12 481 people at a concert.
8906 of these people are adults.
The rest of the people are children.

$\frac{3}{5}$ of the children are boys.

Work out the number of girls at the concert.

$$1 - \frac{3}{5} = \frac{2}{5} \quad \text{— } \frac{2}{5} \text{ of children are girls}$$

$$12481 - 8906 = 3575 \quad \text{— number of children}$$

$$3575 \times \frac{2}{5} = 1430$$

1430

(Total for Question 5 is 4 marks)

- 6 (a) Simplify $6e \times 2f$

$$6 \times 2 = 12$$

12ef

(1)

- (b) Simplify $5m + 7k - 2m + k$

$$(5-2)m$$

$$(7+1)k$$

$$= 3m + 8k$$

(2)

- (c) Solve $5y + 3 = 14$

$$5y + 3 = 14$$

$$5y = 11$$

$$y = \frac{11}{5}$$

$$y = 2.2$$

(2)

(Total for Question 6 is 5 marks)



DO NOT WRITE IN THIS AREA

DO NOT WRITE IN THIS AREA

DO NOT WRITE IN THIS AREA

7 Here are the shoe sizes of 11 people.

7 8 4 4 4 10 5 7 7 4 4

(a) Write down the mode. ~~4~~~~4~~~~4~~~~4~~~~4~~ 5 ~~7~~ ~~7~~ ~~7~~ ~~8~~ ~~10~~
most occurring

4

(1)

(b) Work out the range.
biggest - smallest

10 - 4

6

(2)

(c) Find the median.
middle number

5

(2)

Clark works in a shoe shop.

On Tuesday morning he sold some pairs of shoes.
The mean price of the pairs of shoes was £34

On Tuesday afternoon he sold only two pairs of shoes.
The prices of these pairs of shoes were £31 and £49

(d) Is the mean price of all the pairs of shoes Clark sold on Tuesday more or less than £34?
You must give a reason for your answer.

More, £49 is significantly bigger than £34 compared to £31. This means that the mean would increase

(1)

(Total for Question 7 is 6 marks)



8 The diagram shows two triangles, CDB and BDA .

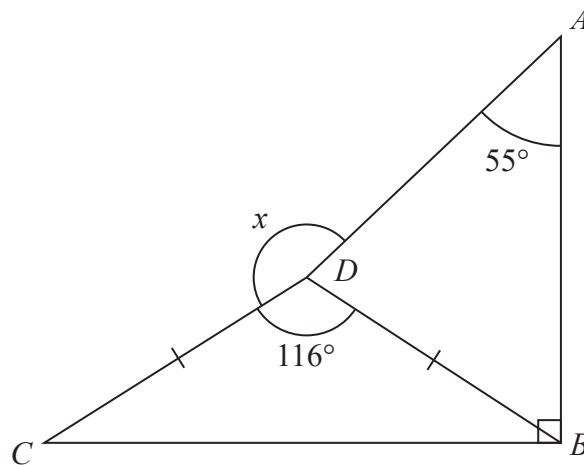


Diagram **NOT** accurately drawn

$$DC = DB$$

$$\text{Angle } ABC = 90^\circ$$

$$\text{Angle } CDB = 116^\circ$$

$$\text{Angle } DAB = 55^\circ$$

Work out the size of the angle marked x .

Give a reason for each stage of your working.

$$\angle CBD = \frac{180 - 116}{2} = 32^\circ$$

Base angles in isosceles triangle are equal

$$\angle ABD = 90 - 32 = 58^\circ$$

Right angle = 90°

$$\angle ADB = 180 - 58 - 55 = 67^\circ$$

Angles in triangle add to 180°

$$\begin{aligned} \angle x &= 360^\circ - 67^\circ - 116^\circ \\ &= 177^\circ \end{aligned}$$

Angles around a point = 360°

..... 177

(Total for Question 8 is 5 marks)



DO NOT WRITE IN THIS AREA

DO NOT WRITE IN THIS AREA

DO NOT WRITE IN THIS AREA

- 9 (a) Write these fractions in order of size.
Start with the smallest fraction.

$$\frac{7}{10} \quad \frac{4}{5} \quad \frac{1}{2} \quad \frac{29}{40}$$

$$0.7 \quad 0.8 \quad 0.5 \quad 0.725$$

$$2 \quad 4 \quad 1 \quad 3$$

$$\frac{1}{2}, \frac{7}{10}, \frac{29}{40}, \frac{4}{5}$$

(2)

(b) Show that $\frac{8}{15} + \frac{3}{10} = \frac{5}{6}$

common denominator = 30

$$\frac{16}{30} + \frac{9}{30} = \frac{25}{30} \xrightarrow{\div 5} \frac{5}{6}$$

(2)

(c) Show that $4\frac{2}{3} \div 1\frac{1}{9} = 4\frac{1}{5}$

$$4\frac{2}{3} = \frac{14}{3} \quad 1\frac{1}{9} = \frac{10}{9}$$

$$\frac{14}{3} \div \frac{10}{9} = \frac{14}{3} \times \frac{9}{10} = \frac{126}{30} \xrightarrow{\div 6} \frac{21}{5}$$



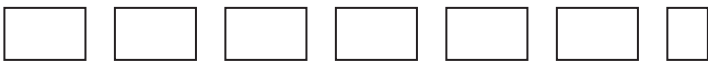
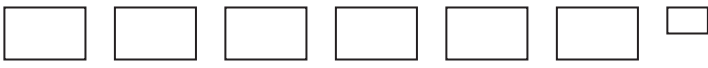

$$= 4\frac{1}{5}$$

(3)

(Total for Question 9 is 7 marks)



- 10 The pictogram gives information about the number of emails Sami sent on each of five days last week.

Monday	
Tuesday	
Wednesday	
Thursday	
Friday	

 represents 8 emails

Work out the mean number of emails Sami sent on these 5 days.

$$\begin{array}{r}
 \text{Monday} : 3 \times 8 + \frac{1}{2} \times 8 = 28 \quad + \\
 \text{Tues} : 5 \times 8 + \frac{3}{4} \times 8 = 46 \quad + \\
 \text{Wedn} : 6 \times 8 + \frac{1}{2} \times 8 = 52 \quad + \\
 \text{Thurs} : 6 \times 8 + \frac{1}{4} \times 8 = 50 \quad + \\
 \text{Fri} : 8 \times 8 = 64 \\
 \hline
 240
 \end{array}$$

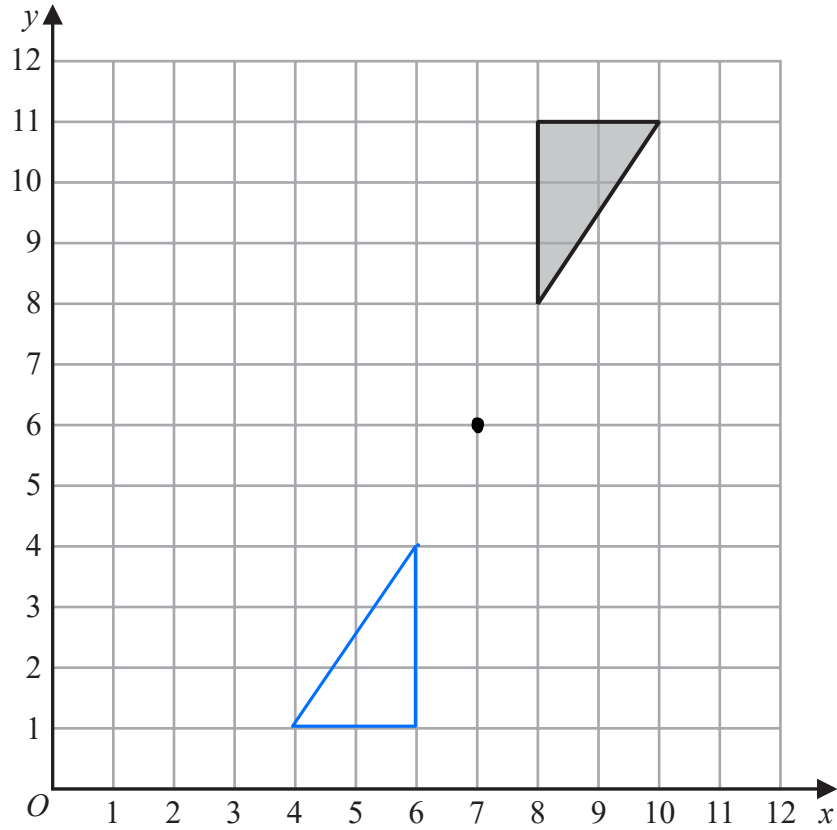
$$\text{Mean} = \frac{\text{Total freq}}{\text{number}} = \frac{240}{5} = 48$$

48

(Total for Question 10 is 4 marks)

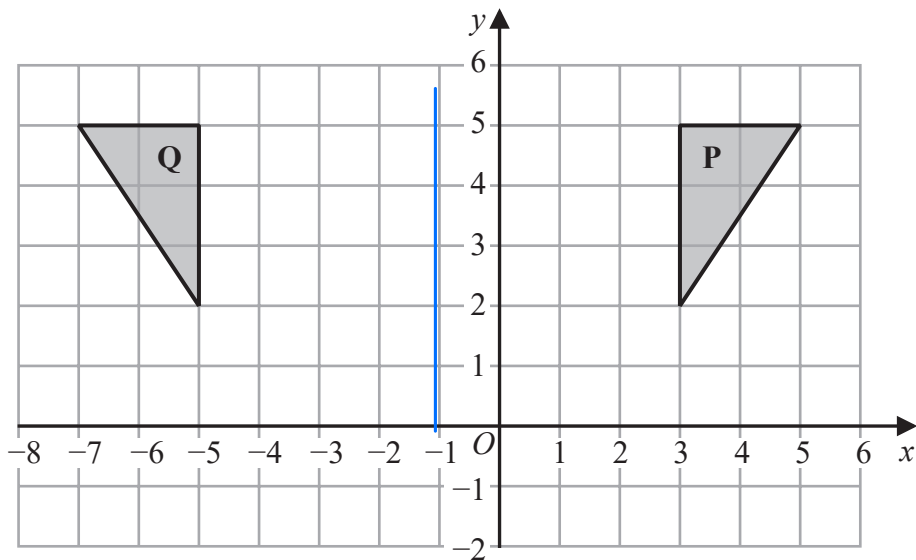


11



(a) On the grid above, rotate the triangle 180° about $(7, 6)$

(2)



(b) Describe fully the single transformation that maps triangle **P** onto triangle **Q**.

Reflection in line $x = -1$

(2)

(Total for Question 11 is 4 marks)



P 5 8 3 6 6 A 0 1 1 2 4

12 (a) Use your calculator to work out the value of

$$\frac{24.3 - 16.8}{0.18} + \sqrt{67.4}$$

Write down all the figures on your calculator display.

$$\frac{125}{3} + 8.20975 \dots = \underline{49.87641697} \quad (2)$$

(b) Write your answer to part (a) correct to 1 significant figure.

$$\begin{array}{r} 49.8 \dots \\ / \\ 10 \\ 40 + 10 = 50 \end{array} = \underline{50} \quad (1)$$

*8 > 5
round up*

(Total for Question 12 is 3 marks)

13 Each exterior angle of a regular polygon is 24°

Work out the number of sides of the polygon.

$$\text{Exterior} = \frac{360}{\text{number of sides}}$$

$$24 = \frac{360}{n}$$

$$n = \frac{360}{24} = 15$$

$$\underline{15}$$

(Total for Question 13 is 2 marks)

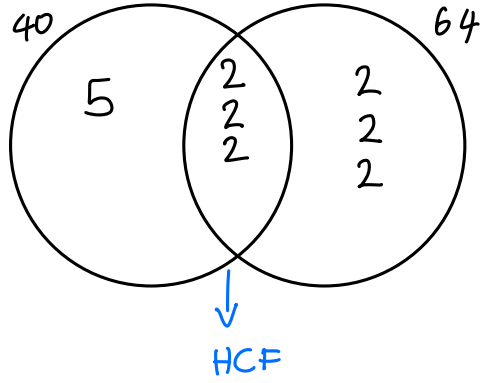
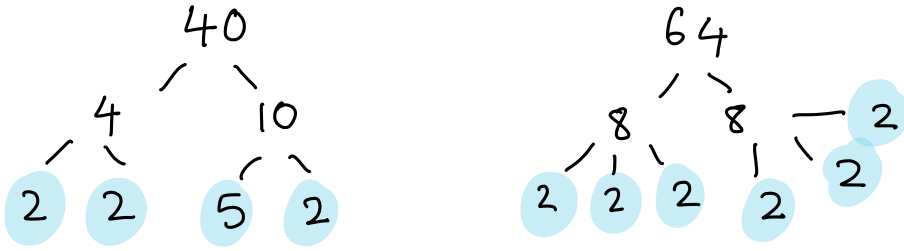


DO NOT WRITE IN THIS AREA

DO NOT WRITE IN THIS AREA

DO NOT WRITE IN THIS AREA

14 (a) Find the highest common factor (HCF) of 40 and 64



$$2 \times 2 \times 2$$

$$\underline{\quad\quad\quad} 8$$

(2)

$$A = 2^n \times 3 \times 5^m$$

(b) Write $8A$ as a product of powers of its prime factors.

$$\begin{aligned}
 & 8 \times A \\
 &= 2^3 \times 2^n \times 3 \times 5^m \\
 &= 2^{n+3} \times 3 \times 5^m
 \end{aligned}$$

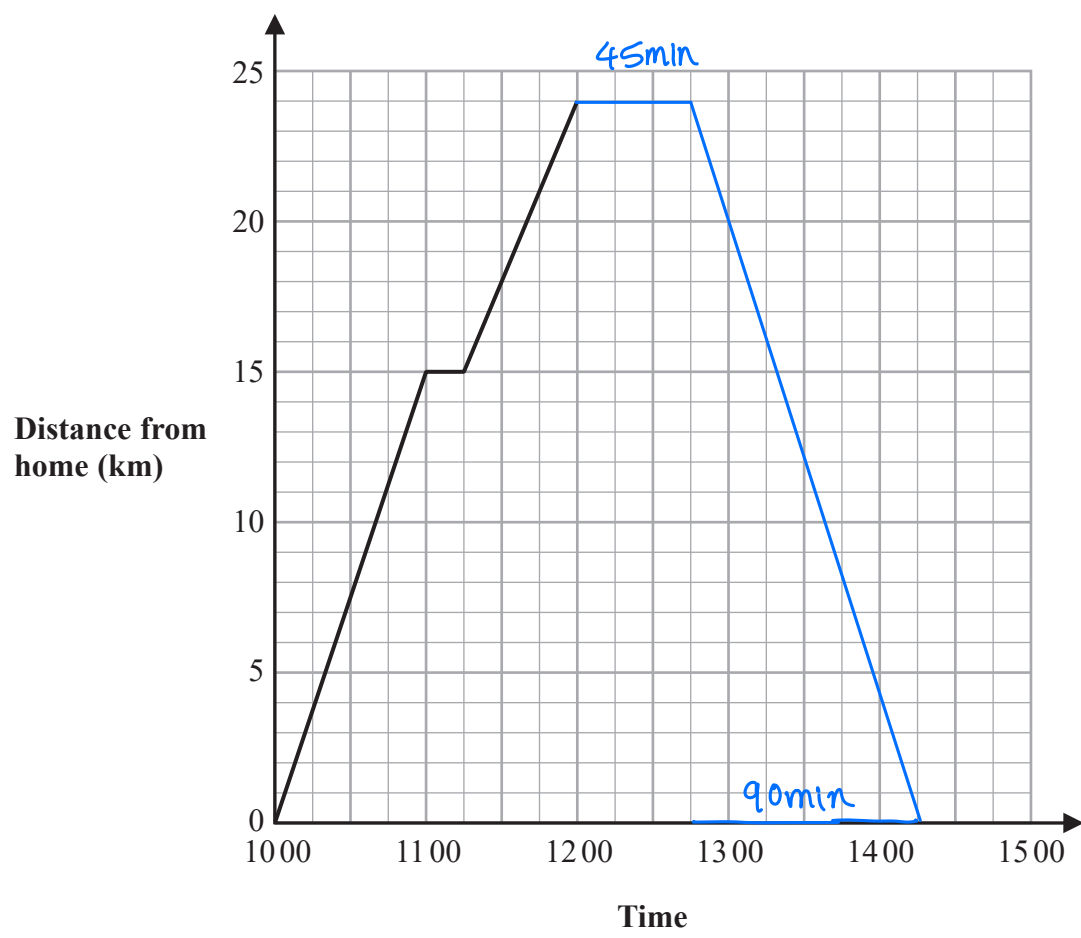
$$\underline{\quad\quad\quad} 2^{n+3} \times 3 \times 5$$

(2)

(Total for Question 14 is 4 marks)



15 Jalina left her home at 1000 to cycle to a park. On her way to the park, she stopped at a friend's house and then continued her journey to the park. Here is the distance-time graph for her journey to the park.



(a) On her journey to the park, did Jalina cycle at a faster speed before or after she stopped at her friend's house? Give a reason for your answer.

Before; the line is steeper before the stop, therefore the speed was greater

(1)



Jalina stayed at the park for 45 minutes.

She then cycled, without stopping, at a constant speed of 16 km/h from the park back to her home.

(b) Show all this information on the distance-time graph.

$$\text{Speed} = \frac{\text{Distance}}{\text{Time}}$$

$$\text{Dist} = 24$$

$$\text{Time} = \frac{24}{16} = \frac{3}{2} \text{ h}$$

(2)

(c) Work out Jalina's average cycling speed, in kilometres per hour, for the complete journey to the park and back.

Do **not** include the times when she was **not cycling** in your calculation.

Give your answer correct to 1 decimal place.

$$\text{Total Distance : } 24 + 24 = 48 \text{ km}$$

$$\text{Total Time : } 90\text{min} + 60\text{min} + 45\text{min}$$

$$= 195\text{min}$$

$$= 3.25\text{hour} \quad \div 60$$

$$\text{Average Speed : } \frac{48}{3.25} = 14.769$$

roundup

$$\dots\dots\dots 14.8 \dots\dots\dots \text{ km/h}$$

(3)

(Total for Question 15 is 6 marks)

DO NOT WRITE IN THIS AREA



16 $P = 2g + 3h$

(a) Work out the value of P when $g = 7$ and $h = -4$

$$P = 2(7) + 3(-4)$$

$$= 14 - 12 =$$

$$\frac{2}{(2)}$$

(b) Simplify $e^9 \div e^5$

$$e^{9-5}$$

$$\frac{e^4}{(1)}$$

(c) Simplify $(y^2)^8$

$$y^{2 \times 8}$$

$$\frac{y^{16}}{(1)}$$

(d) Expand and simplify $(x+9)(x-2)$

$$x^2 - 2x + 9x - 18$$

$$\frac{x^2 + 7x - 18}{(2)}$$

(e) Factorise fully $16c^4p^2 + 20cp^3$

biggest factor \swarrow

$$4cp^2(4c^3 + 5p)$$

$$\frac{16c^4p^2}{4cp^2}$$

$$\frac{20cp^3}{4cp^2}$$

$$\frac{4cp^2(4c^3 + 5p)}{(2)}$$

(Total for Question 16 is 8 marks)



DO NOT WRITE IN THIS AREA

DO NOT WRITE IN THIS AREA

DO NOT WRITE IN THIS AREA

17 In a box,

number of red buttons : number of blue buttons = 5 : 3

number of blue buttons : number of green buttons = 1 : 2

There are 48 green buttons in the box.

Work out the number of red buttons in the box.

$$\begin{array}{l}
 R : B \\
 5 : 3 \\
 \\
 B : G \\
 1 : 2 \\
 \times 3 \\
 3 : 6
 \end{array}$$

$$\begin{array}{l}
 R : B : G \\
 5 : 3 : 6 \\
 \times 8 \quad \times 8 \\
 \rightarrow 40 : 24 : 48
 \end{array}$$

40

(Total for Question 17 is 4 marks)



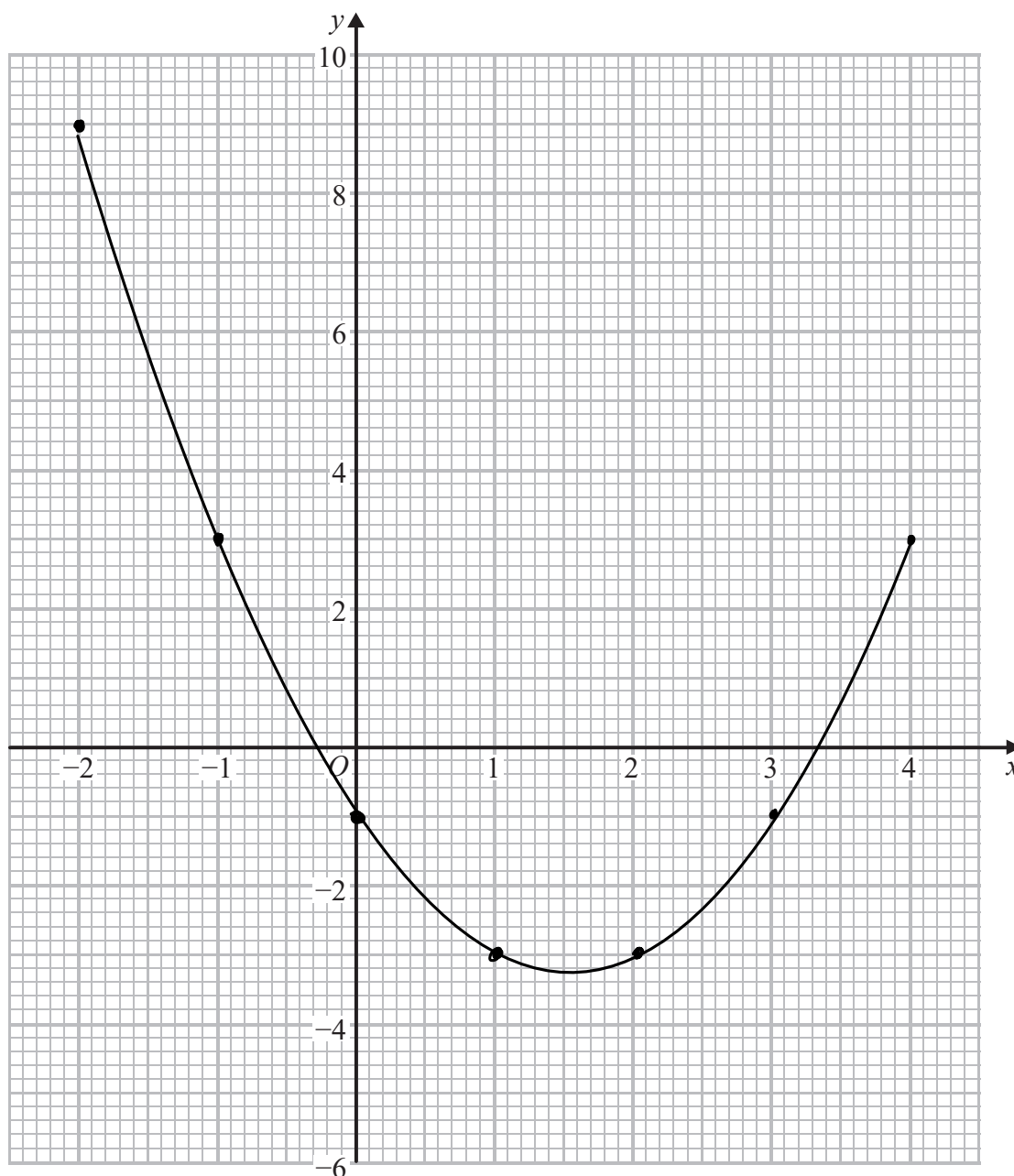
18 (a) Complete the table of values for $y = x^2 - 3x - 1$

type in calculator:
 $(-2)^2 - 3(-2) - 1 =$

x	-2	-1	0	1	2	3	4
y	9	3	-1	-3	-3	-1	3

(2)

(b) On the grid, draw the graph of $y = x^2 - 3x - 1$ for all values of x from -2 to 4



(2)

(Total for Question 18 is 4 marks)



19 Becky has a biased 6-sided dice.

The table gives information about the probability that, when the dice is thrown, it will land on each number.

Number	1	2	3	4	5	6
Probability	$2x$	0.18	$2x$	$3x$	0.26	x

Becky is going to throw the dice 200 times.

Work out an estimate for the number of times that the dice will land on an even number.

Probability adds to 1:

$$2x + 0.18 + 2x + 3x + 0.26 + x = 1$$

$$8x + 0.44 = 1$$

$$8x = 0.56$$

$$x = 0.07$$

$$P(\text{even}) = P(2) + P(4) + P(6)$$

$$= 0.18 + 3(0.07) + 0.07$$

$$P(\text{even}) = 0.46$$

$$0.46 \times 200 = 92$$

— number of times rolling even

92

(Total for Question 19 is 4 marks)



20 The diagram shows a solid cuboid made from wood.

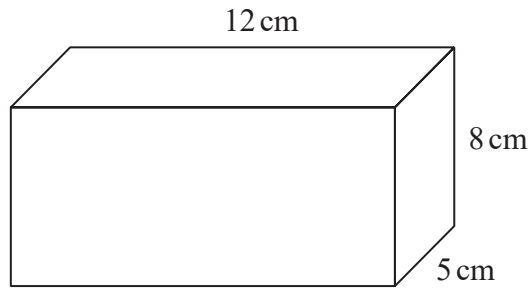


Diagram NOT accurately drawn

The wood has density 0.7 g/cm^3

Work out the mass of the cuboid.

$$\text{Density} = \frac{\text{Mass}}{\text{Volume}}$$

$$\text{Volume : } 12 \times 8 \times 5 = 480 \text{ cm}^3$$

$$\text{Mass} = 0.7 \times 480 = 336 \text{ g}$$

..... 336 grams

(Total for Question 20 is 3 marks)

DO NOT WRITE IN THIS AREA

DO NOT WRITE IN THIS AREA

DO NOT WRITE IN THIS AREA



DO NOT WRITE IN THIS AREA

DO NOT WRITE IN THIS AREA

DO NOT WRITE IN THIS AREA

21 (a) Write 5.7×10^6 as an ordinary number.

5.7000000
6

5,700,000
(1)

(b) Write 0.004 in standard form.

3

between 1 and 10 4×10^{-3}
(1)

(c) Work out $\frac{2 \times 10^4 + 3 \times 10^5}{6.4 \times 10^{-2}}$

$= \frac{20000 + 300000}{0.064} = \frac{320000}{0.064}$

$= 5000000$
(2)

(Total for Question 21 is 4 marks)

22 On 1st January 2016 Li bought a boat for \$170 000
The value of the boat depreciates by 8% per year.

Work out the value of the boat on 1st January 2019
Give your answer correct to the nearest dollar.

$100\% - 8\% = 92\% = \times 0.92$

$2019 - 2016 = 3 \text{ years}$

$170,000 \times 0.92^3 = \132376.96
Starting value multiplier 3 years round up

$\$132377$

(Total for Question 22 is 3 marks)



23 The diagram shows a shape made from a right-angled triangle and a semicircle.

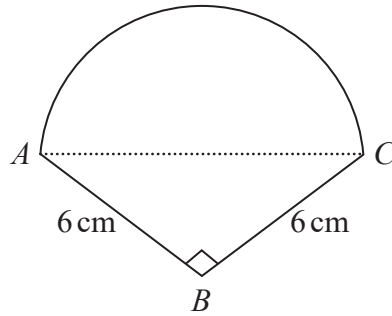


Diagram **NOT** accurately drawn

AC is the diameter of the semicircle.

$BA = BC = 6$ cm

Angle $ABC = 90^\circ$

Work out the area of the shape.

Give your answer correct to 1 decimal place.

$$\text{Area of } ABC : \frac{1}{2} \times 6 \times 6 = 18 \text{ cm}^2$$

$$\begin{aligned} \text{Pythagoras: } a^2 + b^2 &= c^2 \\ 6^2 + 6^2 &= AC^2 \\ AC^2 &= 72 \\ AC &= 6\sqrt{2} \end{aligned}$$

$$\begin{aligned} AC \text{ is diameter} &= 6\sqrt{2} \\ \text{radius} &= 3\sqrt{2} \end{aligned}$$

$$\begin{aligned} \text{Area of semicircle: } &\frac{1}{2} \pi r^2 \\ \frac{1}{2} \pi (3\sqrt{2})^2 &= 9\pi \end{aligned}$$

$$\begin{aligned} \text{Area} &= 9\pi + 18 = 46.27 \text{ (round up)} \\ &= 46.3 \text{ cm}^2 \end{aligned}$$

(Total for Question 23 is 5 marks)

TOTAL FOR PAPER IS 100 MARKS

DO NOT WRITE IN THIS AREA

DO NOT WRITE IN THIS AREA

DO NOT WRITE IN THIS AREA



DO NOT WRITE IN THIS AREA

DO NOT WRITE IN THIS AREA

DO NOT WRITE IN THIS AREA

BLANK PAGE



DO NOT WRITE IN THIS AREA

DO NOT WRITE IN THIS AREA

DO NOT WRITE IN THIS AREA

BLANK PAGE

